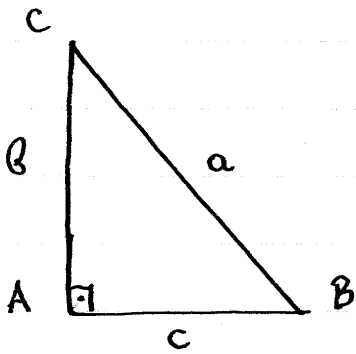


APPLICATION TO TRIANGLES

▼ Right Triangles



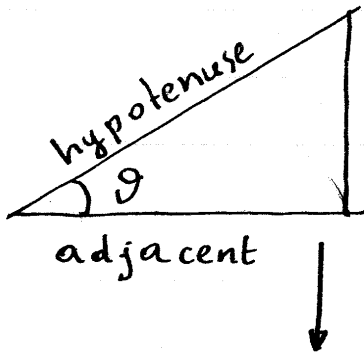
$$\hat{A} = 90^\circ \Leftrightarrow \hat{B} + \hat{C} = 90^\circ$$

$$A = 90^\circ \Leftrightarrow a^2 = b^2 + c^2$$

OR

$$A = 90^\circ \Leftrightarrow BC^2 = AC^2 + AB^2$$

↪ Mnemonic Rule for trig. relations



opposite

$\sin \theta = \frac{\text{opp}}{\text{hyp}}$	$\tan \theta = \frac{\text{opp}}{\text{adj}}$
$\cos \theta = \frac{\text{adj}}{\text{hyp}}$	$\cot \theta = \frac{\text{adj}}{\text{opp}}$

$\sin B = \frac{b}{a} = \cos C$
$\cos B = \frac{c}{a} = \sin C$
$\tan B = \frac{b}{c} = \cot C$
$\cot B = \frac{c}{b} = \tan C$

$b = a \sin B = a \cos C$
$c = a \cos B = a \sin C$
$b = c \tan B = c \cot C$
$c = b \cot B = b \tan C$

→ Solving right triangles

Given $A=90^\circ$ and two other elements, with one of them being a side, it is possible to calculate all other elements of the triangle.

By elements we mean:

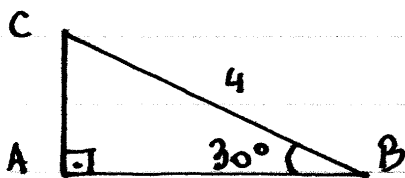
a) The angles: A, B, C

b) The sides: a, b, c

EXAMPLES

1) Hypotenuse + Angle:

Given: $B=30^\circ$, $A=90^\circ$, $a=4$.



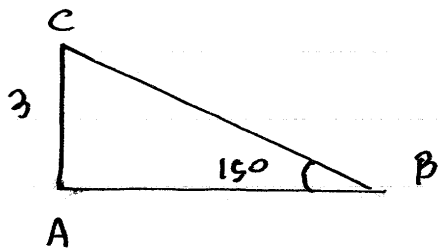
$$b = AC = BC \sin B = 4 \sin 30^\circ = 4 \cdot (1/2) = 2$$

$$c^2 = a^2 - b^2 = 4^2 - 2^2 = 16 - 4 = 12 = 4 \cdot 3 \Rightarrow c = 2\sqrt{3}$$

$$C = 90 - B = 90^\circ - 30^\circ = 60^\circ$$

2) Side + Angle

Given: $B=15^\circ$, $A=90^\circ$, $b=3$



$$C = 90 - B = 90^\circ - 15^\circ = 75^\circ$$

$$\sin B = \frac{AC}{BC} = \frac{3}{a} \Rightarrow a = \frac{3}{\sin 15^\circ} \quad (1)$$

Note that

$$\sin^2 15^\circ = \frac{1 - \cos 30^\circ}{2} = \frac{1 - \sqrt{3}/2}{2} = \frac{2 - \sqrt{3}}{4} \Rightarrow$$

$$\Rightarrow \sin 15^\circ = \frac{\sqrt{2 - \sqrt{3}}}{2} \quad (2)$$

From (1) and (2):

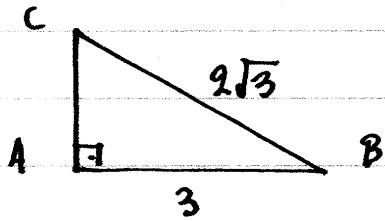
$$\begin{aligned} a &= \frac{3}{\frac{\sqrt{2 - \sqrt{3}}}{2}} = \frac{6}{\sqrt{2 - \sqrt{3}}} = \frac{6\sqrt{2 - \sqrt{3}}}{2 - \sqrt{3}} = \\ &= \frac{6(2 + \sqrt{3})\sqrt{2 - \sqrt{3}}}{(2 + \sqrt{3})(2 - \sqrt{3})} = \frac{6(2 + \sqrt{3})\sqrt{2 - \sqrt{3}}}{4 - 3} = \\ &= 6(2 + \sqrt{3})\sqrt{2 - \sqrt{3}} \quad (3) \end{aligned}$$

From (3) and $b = 3$:

$$\begin{aligned} c^2 &= a^2 - b^2 = [6(2 + \sqrt{3})\sqrt{2 - \sqrt{3}}]^2 - 3^2 = \\ &= 36(2 + \sqrt{3})^2(2 - \sqrt{3}) - 9 = 36(2 + \sqrt{3})(4 - 3) - 9 \\ &= 36(2 + \sqrt{3}) - 9 = 9[4(2 + \sqrt{3}) - 1] = 9[7 + 4\sqrt{3}] \Rightarrow \\ &\Rightarrow c = 3\sqrt{7 + 4\sqrt{3}} \end{aligned}$$

3) Side + Hypotenuse

Given: $A = 90^\circ$, $a = 2\sqrt{3}$, $c = 3$



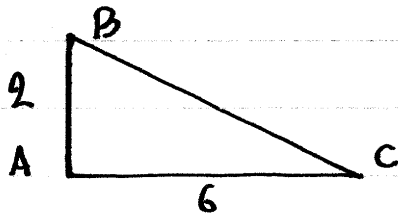
$$b^2 = a^2 - c^2 = (2\sqrt{3})^2 - 3^2 = 4 \cdot 3 - 9 = 12 - 9 = 3 \Rightarrow \underline{b = \sqrt{3}}$$

$$\cos B = \frac{AB}{BC} = \frac{3}{2\sqrt{3}} = \frac{\sqrt{3}}{2} = \cos 30^\circ \Rightarrow \underline{B = 30^\circ}$$

$$\underline{C = 90 - B = 90 - 30 = 60^\circ}$$

4) Side + Side

Given: $A = 90^\circ$, $b = 6$, $c = 2$



$$a^2 = b^2 + c^2 = 6^2 + 2^2 = 36 + 4 = 40 \Rightarrow \underline{a = 2\sqrt{10}}$$

$$\tan B = \frac{AC}{AB} = \frac{b}{c} = \frac{6}{2} = 3 \Rightarrow \underline{B = \text{Arctan}(3)}$$

$$\underline{C = 90 - B = 90 - \text{Arctan}(3)}$$

EXERCISES

① Solve the following right triangles with $A=90^\circ$:

a) $b=3$, $c=4$

b) $B=60^\circ$, $a=2$

c) $B=45^\circ$, $b=3$

d) $C=15^\circ$, $a=1$

e) $a=2\sqrt{3}$, $b=3$

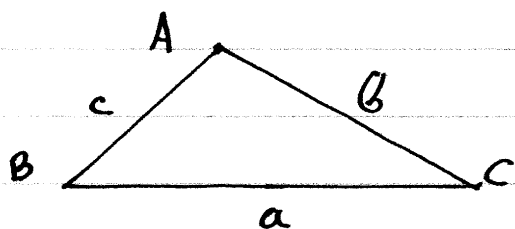
f) $b=1+\sqrt{2}$, $a=\sqrt{6}$

↳ To check your answers, use a calculator to confirm that your results satisfy Mollweide's identity:

$$\boxed{\frac{b-c}{a} \cos\left(\frac{A}{2}\right) = \sin\left(\frac{B-C}{2}\right)}$$

▼ General Triangles

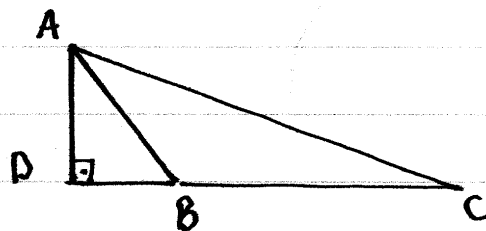
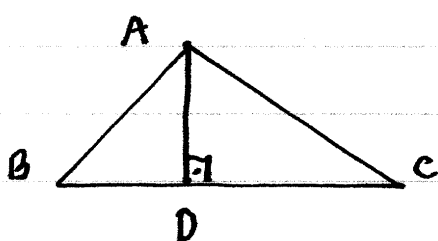
Consider an arbitrary triangle $\triangle ABC$.



$$a = BC, b = CA, c = AB.$$

① Law of sines \rightarrow $\boxed{\frac{a}{\sin A} = \frac{b}{\sin B} = \frac{c}{\sin C}}$

Proof



► Bring the height AD with $AD \perp BC$.

$$\text{From } \triangle ADC: AD = AC \cdot \sin C = b \sin C \quad (1)$$

$$\text{From } \triangle ADB: AD = AB \cdot \sin B = c \sin B \quad (2)$$

From (1) and (2):

$$b \sin C = c \sin B \Rightarrow \frac{b}{\sin B} = \frac{c}{\sin C}$$

$$\text{Similarly we get } \frac{a}{\sin A} = \frac{b}{\sin B} \quad \square$$

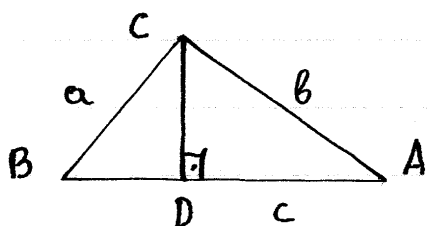
- We now use the projection laws to prove the law of cosines.

↙ → Projection laws →

$$\begin{aligned} c &= a \cos B + b \cos A \\ a &= b \cos C + c \cos B \\ b &= c \cos A + a \cos C \end{aligned}$$

Proof

Case 1: $B \leq \pi/2$ (acute angle)



► Bring the height $CD \perp AB$ with $D \in AB$.

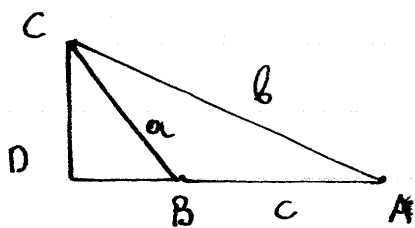
From $\triangle BDC$: $BD = BC \cos B = a \cos B$. (1)

From $\triangle CDA$: $AD = AC \cos A = b \cos A$ (2)

From (1) and (2):

$$c = AB = BD + AD = a \cos B + b \cos A.$$

Case 2: $B > \pi/2$



► Bring the height $CD \perp AB$ with $B \in AD$.

From $\triangle BDC$: $BD = BC \cos(\widehat{CBD}) = a \cos(\pi - B) = -a \cos B$. (3)

From $\triangle CDA$: $AD = AC \cos A = b \cos A$ (4)

From (3) and (4):

$$\begin{aligned} c = AB &= AD - BD = b \cos A - (-a \cos B) = \\ &= a \cos B + b \cos A. \end{aligned}$$

Repeat argument for the other two equations.

② Law of cosines

$$\begin{aligned} a^2 &= b^2 + c^2 - 2bc \cos A \\ b^2 &= c^2 + a^2 - 2ca \cos B \\ c^2 &= a^2 + b^2 - 2ab \cos C \end{aligned}$$

$$\begin{aligned} \cos A &= \frac{b^2 + c^2 - a^2}{2bc} \\ \cos B &= \frac{c^2 + a^2 - b^2}{2ca} \\ \cos C &= \frac{a^2 + b^2 - c^2}{2ab} \end{aligned}$$

Proof

$$\begin{aligned} b^2 + c^2 &= b(c \cos A + a \cos C) + c(a \cos B + b \cos A) \\ &= b c \cos A + a b \cos C + a c \cos B + b c \cos A \\ &= 2 b c \cos A + (a b \cos C + a c \cos B) = \\ &= 2 b c \cos A + a (b \cos C + c \cos B) \\ &= 2 b c \cos A + a^2 \Rightarrow \end{aligned}$$

$$\Rightarrow a^2 = b^2 + c^2 - 2bc \cdot \cos A$$

Repeat argument for the other two equations.

→ Solving general triangles

- We use the law of sines when given:
 - a) 1 side + 2 angles
 - b) 2 sides + angle not between them
- We use the law of cosines when given:
 - c) 3 sides
 - d) 2 sides + angle between them.
- We also note that for any triangle angle, A , we have $0 < A < \pi$, and therefore:
 $\sin A = x \Leftrightarrow A = \text{Arcsin}(x) \vee A = \pi - \text{Arcsin}(x)$
 $\cos A = x \Leftrightarrow A = \text{Arccos}(x)$.
- When solving $\sin A = x$ we use the following triangle property to accept or reject solutions.
 - $a < b \Leftrightarrow A < B$
 - $b < c \Leftrightarrow B < C$
 - $c < a \Leftrightarrow C < A$ etc.

EXAMPLES

a) 2 sides + angle not between them. (one solution)

Given: $a=5$, $b=6$, $B=60^\circ$.

Since: $\frac{a}{\sin A} = \frac{b}{\sin B} \Rightarrow$

$$\Rightarrow \sin A = \frac{a \sin B}{b} = \frac{5 \sin 60^\circ}{6} = \frac{5 \cdot (\sqrt{3}/2)}{6} = \frac{5\sqrt{3}}{12} \Rightarrow$$

$$\Rightarrow A = \text{Arcsin}\left(\frac{5\sqrt{3}}{12}\right) \vee A = \pi - \text{Arcsin}\left(\frac{5\sqrt{3}}{12}\right) \Rightarrow$$

$$\Rightarrow A \cong 46^\circ \vee A \cong 180 - 46 = 134. \quad (1)$$

$$\text{Since } a < b \Rightarrow A < B \left. \vphantom{\begin{matrix} a < b \\ \Rightarrow A < B \end{matrix}} \right\} \Rightarrow \underline{A \cong 46^\circ} \text{ (one solution)}$$

$$B = 60^\circ$$

$$\underline{C = 180 - A - B \cong 180 - 46 - 60 = 74^\circ}$$

Finally:

$$\frac{c}{\sin C} = \frac{b}{\sin B} \Rightarrow$$

$$\Rightarrow c = \frac{b \sin C}{\sin B} = \frac{6 \sin 74^\circ}{\sin 60^\circ} \approx 6.66$$

$$\text{Thus: } a = 5 \quad A \cong 46^\circ$$

$$b = 6 \quad B = 60^\circ$$

$$c \cong 6.66 \quad C \cong 74^\circ.$$

b) 2 sides + angle not between them (2 solutions)

$$\text{Given: } A = 30^\circ, a = 2, b = 3$$

$$\frac{b}{\sin B} = \frac{a}{\sin A} \Rightarrow$$

$$\Rightarrow \sin B = \frac{b \sin A}{a} = \frac{3 \sin 30^\circ}{2} = \frac{3 \cdot (1/2)}{2} = \frac{3}{4} \Rightarrow$$

$$\Rightarrow B = \text{Arcsin}(3/4) \cong 48^\circ \vee B \cong 180^\circ - 48^\circ = 132^\circ$$

$$\text{Since } a < b \Rightarrow A < B \Rightarrow 30 < B$$

Both solution for B are valid, thus there are two possible triangles.

c) 2 sides + angle not between them (no solution)

Given: $A = 45^\circ$, $a = 2$, $b = 8$

$$\frac{b}{\sin B} = \frac{a}{\sin A} \Rightarrow$$

$$\Rightarrow \sin B = \frac{b \sin A}{a} = \frac{8 \sin 45^\circ}{2} = 4 \cdot \frac{\sqrt{2}}{2} = 2\sqrt{2} > 1$$

thus no triangle is possible.

d) 3 sides

Given $a = \sqrt{3}/2$, $b = \sqrt{2}/2$, $c = (\sqrt{6} + \sqrt{2})/4$

Note that:

$$a^2 = 3/4 \text{ and } b^2 = 2/4 = 1/2 \text{ and}$$

$$c^2 = \frac{(\sqrt{6} + \sqrt{2})^2}{16} = \frac{6 + 2\sqrt{12} + 2}{16} = \frac{8 + 4\sqrt{3}}{16}$$

$$= \frac{2 + \sqrt{3}}{4}$$

$$\cos A = \frac{b^2 + c^2 - a^2}{2bc} = \frac{\frac{1}{2} + \frac{2 + \sqrt{3}}{4} - \frac{3}{4}}{\cancel{2} \cdot \frac{\sqrt{2}}{\cancel{2}} \cdot \frac{\sqrt{6} + \sqrt{2}}{4}} =$$

$$= \frac{2 + 2 + \sqrt{3} - 3}{\sqrt{2}(\sqrt{6} + \sqrt{2})} = \frac{1 + \sqrt{3}}{2 + \sqrt{12}} = \frac{1 + \sqrt{3}}{2 + 2\sqrt{3}} =$$

$$= \frac{1 + \sqrt{3}}{2(1 + \sqrt{3})} = \frac{1}{2} = \cos 60^\circ \Rightarrow \underline{A = 60^\circ}$$

$$\begin{aligned} \cos B &= \frac{c^2 + a^2 - b^2}{2ac} = \frac{\frac{2+\sqrt{3}}{4} + \frac{3}{4} - \frac{2}{4}}{2 \cdot \frac{\sqrt{3}}{2} \cdot \frac{\sqrt{6}+\sqrt{2}}{4}} = \\ &= \frac{2+\sqrt{3}+3-2}{\sqrt{3}(\sqrt{6}+\sqrt{2})} = \frac{3+\sqrt{3}}{\sqrt{3}(\sqrt{6}+\sqrt{2})} = \frac{\sqrt{3}(\sqrt{3}+1)}{\sqrt{3}\sqrt{2}(\sqrt{3}+1)} = \\ &= \frac{1}{\sqrt{2}} = \cos 45^\circ \Rightarrow B = 45^\circ. \end{aligned}$$

$$C = 180^\circ - A - B = 180^\circ - 60^\circ - 45^\circ = 75^\circ.$$

e) 2 sides + angle in between

Given: $a=2$, $b=3$, $C=30^\circ$

$$\begin{aligned} c^2 &= a^2 + b^2 - 2ab \cos C = 2^2 + 3^2 - 2 \cdot 2 \cdot 3 \cdot \cos 30^\circ = \\ &= 4 + 9 - 12 \cdot (\sqrt{3}/2) = 13 - 6\sqrt{3} \Rightarrow \\ \Rightarrow c &= \sqrt{13 - 6\sqrt{3}} \end{aligned}$$

$$\begin{aligned} \cos B &= \frac{c^2 + a^2 - b^2}{2ac} = \frac{(13 - 6\sqrt{3}) + 2^2 - 3^2}{2 \cdot 2 \cdot \sqrt{13 - 6\sqrt{3}}} = \\ &= \frac{13 - 6\sqrt{3} + 4 - 9}{4\sqrt{13 - 6\sqrt{3}}} = \frac{8 - 6\sqrt{3}}{4\sqrt{13 - 6\sqrt{3}}} = \\ &= \frac{4 - 3\sqrt{3}}{2\sqrt{13 - 6\sqrt{3}}} \Rightarrow B = \arccos\left(\frac{4 - 3\sqrt{3}}{2\sqrt{13 - 6\sqrt{3}}}\right) \end{aligned}$$

$$\begin{aligned}\cos A &= \frac{b^2 + c^2 - a^2}{2bc} = \frac{3^2 + (13 - 6\sqrt{3}) - 2^2}{2 \cdot 3 \cdot \sqrt{13 - 6\sqrt{3}}} = \\ &= \frac{9 + 13 - 6\sqrt{3} - 4}{6\sqrt{13 - 6\sqrt{3}}} = \frac{18 - 6\sqrt{3}}{6\sqrt{13 - 6\sqrt{3}}} = \\ &= \frac{3 - \sqrt{3}}{\sqrt{13 - 6\sqrt{3}}} \Rightarrow A = \arccos\left(\frac{3 - \sqrt{3}}{\sqrt{13 - 6\sqrt{3}}}\right)\end{aligned}$$

EXERCISES

② Solve the following general triangles $\hat{A}\hat{B}\hat{C}$:

a) $a=1, b=3, B=30^\circ$

b) $a=2, b=1, B=75^\circ$

c) $a=3, b=4, B=45^\circ$

d) $a=3, b=4, c=5$

e) $a=2, b=\sqrt{6}, c=1+\sqrt{3}$

f) $A=60^\circ, B=45^\circ, a=5$

g) $a=3, b=\sqrt{2}, C=45^\circ$

h) $a=1, b=\sqrt{3}, C=60^\circ$

↳ To confirm your answer use a calculator to verify that it satisfies the Mollweide identity:

$$\boxed{\frac{b-c}{a} \cos\left(\frac{A}{2}\right) = \sin\left(\frac{B-C}{2}\right)}$$

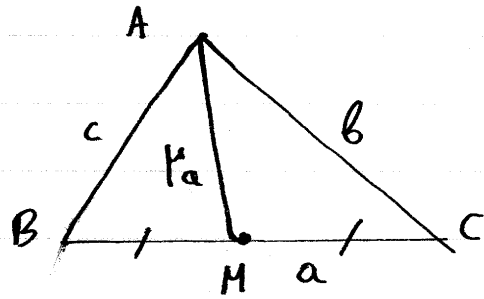
③ Consider a triangle $\hat{A}\hat{B}\hat{C}$. Let AD be the bisector of the angle A with D a point on BC . Show that

$$\frac{DB}{DC} = \frac{AB}{AC}$$

(Hint: Use the law of sines to calculate DB, DC)

- ④ Let $\triangle ABC$ be a triangle and let AM be a median with M on BC such that $BM = CM$.
If $\mu_a = AM$, show that

$$b^2 + c^2 = 2\mu_a^2 + \frac{a^2}{2}$$



(Hint: Use law of cosines to calculate μ_a).

- ⑤ Show the Mollweide identities; for any triangle

a) $\frac{b-c}{a} \cos\left(\frac{A}{2}\right) = \sin\left(\frac{B-C}{2}\right)$

b) $\frac{b+c}{a} \sin\left(\frac{A}{2}\right) = \cos\left(\frac{B-C}{2}\right)$

c) $\frac{b-c}{b+c} = \tan\left(\frac{B-C}{2}\right) \tan\left(\frac{A}{2}\right)$

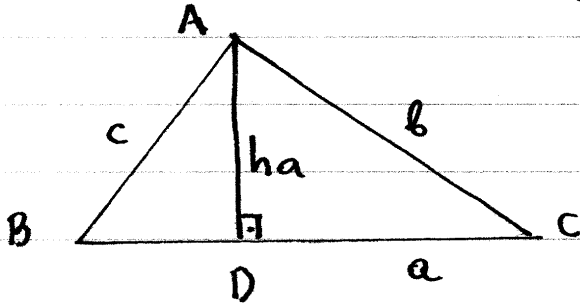
(Hint: Use law of sines to write a, b, c in terms of $\sin A, \sin B, \sin C$. Then use the sum to product identities)

↗ The identity in 5c is the lesser-known law of the tangents.

d) $\frac{b^2 - c^2}{a^2} \sin A = \sin(B-C)$

▼ Area of triangles

Let $\triangle ABC$ be a triangle with heights h_a, h_b, h_c .



It is well-known that the area of $\triangle ABC$ is given by

$$A = \frac{aha}{2} = \frac{bh_b}{2} = \frac{ch_c}{2}$$

We note that:

$$h_a = c \sin B$$
$$h_b = a \sin C$$
$$h_c = b \sin A$$

and therefore

$$A = \frac{1}{2} ab \sin C = \frac{1}{2} bc \sin A = \frac{1}{2} ac \sin B$$

We will now show that

$$A = \sqrt{s(s-a)(s-b)(s-c)}$$
$$2s = a+b+c$$

(Heron's formula)

Proof

$$A = \frac{1}{2} ac \sin B \Rightarrow$$

$$\Rightarrow A^2 = \frac{1}{4} a^2 c^2 \sin^2 B = \frac{1}{4} a^2 c^2 (1 - \cos^2 B) =$$

$$= \frac{1}{4} a^2 c^2 (1 - \cos B)(1 + \cos B) =$$

$$= \frac{1}{4} a^2 c^2 \left[1 - \frac{a^2 + c^2 - b^2}{2ac} \right] \left[1 + \frac{a^2 + c^2 - b^2}{2ac} \right]$$

$$= \frac{1}{4} \frac{a^2 c^2}{(2ac)^2} (2ac - a^2 - c^2 + b^2)(2ac + a^2 + c^2 - b^2)$$

$$= \frac{1}{16} [b^2 - (a-c)^2] [(a+c)^2 - b^2] =$$

$$= \frac{1}{16} [b-a+c][b+a-c][a+c-b][a+c+b]$$

$$= \frac{(a+b+c)}{2} \frac{(-a+b+c)}{2} \frac{(a-b+c)}{2} \frac{(a+b-c)}{2}$$

Note that

$$s-a = \frac{a+b+c}{2} - a = \frac{a+b+c-2a}{2} = \frac{-a+b+c}{2}$$

$$s-b = \frac{a-b+c}{2} \quad \text{and} \quad s-c = \frac{a+b-c}{2}$$

$$\text{thus } A^2 = s(s-a)(s-b)(s-c) \Rightarrow$$

$$\Rightarrow A = \sqrt{s(s-a)(s-b)(s-c)}$$

□

EXERCISES

⑥ Find the area of triangles with

a) $a=1$, $b=2$, $c=2$

b) $a=2$, $b=4$, $c=3$

c) $a=1$, $b=2$, $C=60^\circ$

d) $a=2$, $b=1$, $C=45^\circ$

⑦ Show that for any triangle $\triangle ABC$:

a) $\sin\left(\frac{B}{2}\right) = \sqrt{\frac{(s-c)(s-a)}{ca}}$ (Hint: Use $\cos 2\alpha$ identities and the

b) $\cos\left(\frac{B}{2}\right) = \sqrt{\frac{s(s-b)}{ca}}$ law of cosines)

⑧ Consider a triangle $\triangle ABC$ and let AD be the bisector of the angle A with D on BC . Use the result of exercise 3 to show that

a) $DB = \frac{ac}{b+c}$ and $DC = \frac{bc}{b+c}$

b) $\delta_a = AD = \frac{ac}{b+c} \frac{2\sin(B/2)\cos(B/2)}{\sin(A/2)}$

(Hint: Use law of sines on $\triangle ABD$)

c) $\delta_a = \frac{2\sqrt{bc}}{b+c} \cdot \sqrt{s(s-a)}$

(Hint: Use exercise 7)